


Question bank
Grade 1- Maths
Chapter 8- Shapes and Patterns

Questions

1. A triangle has ----- sides.
2. ----- is a four- sided structure.
3. Identify the below shape.



- a. Triangle
- b. Rectangle
- c. Circle


4. Circle the correct name of the given shape.



square rectangle triangle chair

5. Identify and colour the shape.

Rectangle



6. Tick the correct answer.

- a. These lines are straight line.




Yes

No

7. Which of these are made up of only straight lines? Circle them.

7 8 H U E

8. What comes next?



9. Draw the missing shape in the given blank to complete the pattern.



10. Match the shapes



Cone



Sphere



Cube



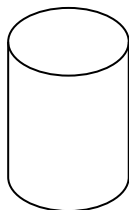
Cylinder

KIDPID.COM

11. What 3D shape looks like a pyramid?

- a) Cone b) Cube c) Cylinder

12. What shape is this?



- a. Cone b. Cylinder c. Cube